

Name:

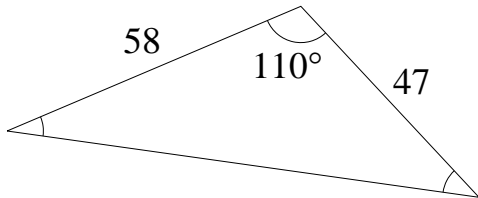
Class/Set:

Area of a Non-right-angled Triangle

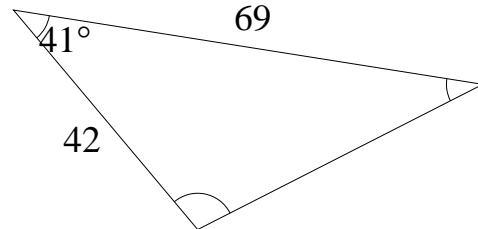
www.mathsprint.co.uk

1: Find the unknown quantity (correct to 1 decimal place):

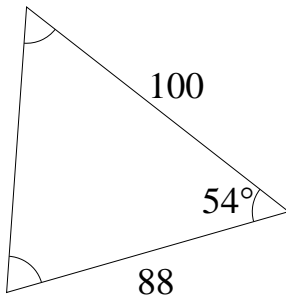
a) Calculate the area:



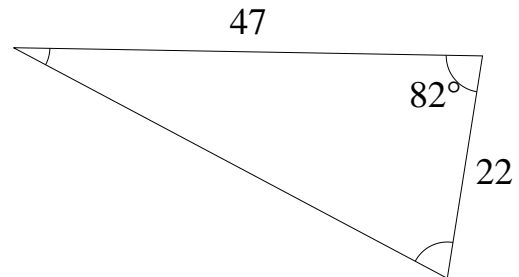
b) Calculate the area:



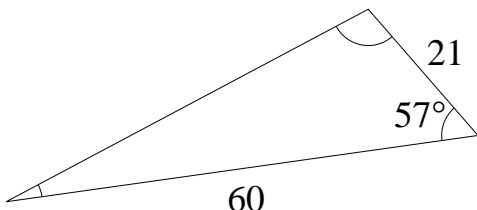
c) Calculate the area:



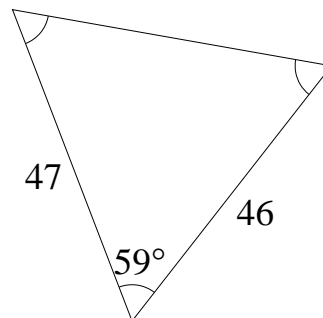
d) Calculate the area:



e) Calculate the area:



f) Calculate the area:



Answers: Area of a Non-right-angled Triangle

www.mathsprint.co.uk

- 1: a) Area = 1280.8 units² b) Area = 950.6 units² c) Area = 3559.6 units²
 d) Area = 511.9 units² e) Area = 528.3 units² f) Area = 926.5 units²